

Summer Term – Week 2 (w/c 27th April)

Look out for this date on the website so you know you are on the right week!

ONLINE PACK



Year 5


Week beginning – 4.5.20

Subject: Maths


<https://whiterosemaths.com/homelearning/year-5/>

For help with this learning pack, please follow the link to watch the short video clips.

They are short lessons to help guide you through the questions each day.



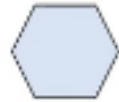
Lesson 1 - Adding decimals with the same number of decimal places



Flashback 4

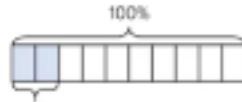
Year 5 | Week 3 | Day 5

1) Find the missing number.
 $0.36 + \square = 1$



2) Which is larger, 0.709 or 0.82?

3) What percentage is shaded?



4) Work out the area of the rectangle.



Get the Activity

Lesson 1 - Y5 Summer Block 1 WO5 Adding decimals with the same number of decimal places 2020

Get the Answers

Lesson 1 - Y5 Summer Block 1 ANS5 Adding decimals with the same number of decimal places 2020

<https://whiterosemaths.com/homelearning/year-5/>

Have a go



1. Click on the link
2. Watch the lesson clip
3. When this sign pops up, pause the video and have a go at the questions.
4. When you have done this, click on 'Get the Activity' to complete the questions.
5. When you have finished, click on 'Get the Answers'

Lesson 2 - Subtracting decimals with the same number of decimal places

Flashback 4 Year 5 | Week 4 | Day 1



1) Add 0.63 to 0.74

2) Subtract 0.35 from 0.78

3) Round 0.81 to the nearest whole number.

4) How many girls are there altogether?

	Boys	Girls
Age 9	53	74
Age 10	72	81




Get the Activity

Lesson 2 - Y5 Summer Block 1 WO6 Subtracting decimals with the same number of decimal places 2020

Get the Answers

Lesson 2 Y5 Summer Block 1 ANS6 Subtracting decimals with the same number of decimal places 2020



<https://whiterosemaths.com/homelearning/year-5/>

Have a go



1. Click on the link
2. Watch the lesson clip
3. When this sign pops up, pause the video and have a go at the questions.
4. When you have done this, click on 'Get the Activity' to complete the questions.
5. When you have finished, click on 'Get the Answers'

Lesson 3 - Adding decimals with a different number of decimal places


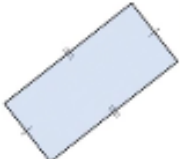
Flashback 4 Year 5 | Week 4 | Day 2

1) Add 0.45 to 0.85

2) What is 0.05 less than 0.71?

3) Which percentage is the same as $\frac{3}{5}$?
3.5% 30% 35% 60%

4) How many sides does a hexagon have?



Get the Activity

Lesson 3 - Y5 Summer Block 1 WO7 Adding decimals with a different number of decimal places 2020

Get the Answers

Lesson 3 Y5 Summer Block 1 ANS7 Adding decimals with a different number of decimal places 2020



<https://whiterosemaths.com/homelearning/year-5/>

Have a go



1. Click on the link
2. Watch the lesson clip
3. When this sign pops up, pause the video and have a go at the questions.
4. When you have done this, click on 'Get the Activity' to complete the questions.
5. When you have finished, click on 'Get the Answers'

Lesson 4 - Subtracting decimals with a different number of decimal places

Flashback 4 Year 5 | Week 4 | Day 3

1) Work out $3.16 + 2.52$

2) Complete the calculation.
 $\square + 0.28 = 1$

3) Which is greater, $\frac{37}{1000}$ or $\frac{3}{100}$?

4) How many hours are there in three days?

White Rose Maths

Get the Activity

Lesson 4 - Y5 Summer Block 1 WO8 Subtracting decimals with a different number of decimal places 2020

Get the Answers

Lesson 4 Y5 Summer Block 1 ANS8 Subtracting decimals with a different number of decimal places 2020



<https://whiterosemaths.com/homelearning/year-5/>

Have a go



1. Click on the link
2. Watch the lesson clip
3. When this sign pops up, pause the video and have a go at the questions.
4. When you have done this, click on 'Get the Activity' to complete the questions.
5. When you have finished, click on 'Get the Answers'

Friday Maths Challenge - Coming Soon!



 **Get the Answers**

Coming soon!